

Powered by:



## Student's Reference Sample Paper



### Syllabus

- ✓ Competence and knowledge in Reasoning (Verbal & Non-verbal) & English (Grammar & Vocabulary)

### Exam pattern

Class	No. of Questions	Total Marks	Duration (min.)
Class - 9	75	75	90

#### For Class 9

English	: 35
Reasoning	: 45

## English

Observe the following advertisement and answer the questions that follow

<b>HYDERABAD METROPOLITAN DEVELOPMENT AUTHORITY</b> HMDA Complex, Tarnaka, Hyderabad - 500 007, T.S. India.	
<b>HMDA - Growing Global</b>	
<b>Sale of Land</b> Sale of land at Nandagiri Hills (4.795 Acres)	<b>Sale of Plots</b> Plots at Gopanpally layout (Near Gachibowli), including plots at Tellapur, Miyapur, Nallagandla, Mushk Mahal, Asif Nagar, Chanda Nagar.
<i>Through e-bidding - www.hmda.gov.in or contact : 9849909889, 9849909799 Starts on 5-2-2017, Closes on 26-02-2017 Bid opening on 28-02-2017 at 11: 00 A.M. at HMDA Office, Tarnaka.</i>	

1. **Expand HMDA**

- (A) Hyderabad Merit Development Authority
- (B) Hyderabad Moment Development Authority
- (C) Hyderabad Municipality Development Authority
- (D) Hyderabad Metropolitan Development Authority

Each of the following questions contains a main word. Select the word from the options that is most similar in meaning to the given word

2. **Enormous**

- (A) insignificant
- (B) huge
- (C) spacious
- (D) restricted

Find the correct passive voice for the given sentences

3. **Do you like meat?**

- (A) Is meat liked by you?
- (B) Was meat liked by you?
- (C) Has meat been eaten by you?
- (D) Had meat been eaten by you?

4. **Correct the underlined part of the sentence choosing from the given options**

Each of our students pay their tuition fee at the beginning of the month.

- (A) students pays their
- (B) students pay their
- (C) students pays his/her
- (D) student pay there

5. **Choose the most suitable alternative to fill the blank in the following sentence.**

No one is allowed \_\_\_\_\_ the trees on the forest.

- (A) to fall
- (B) to fell
- (C) to fallen
- (D) to felled

#### Key

1	2	3	4	5	6	7	8	9	10
D	B	A	C	B					

# Reasoning

1. Which letters will come exactly between the tenth letter from your left and the seventh letter from your right, without changing any order in the original English alphabet?

- (A) N                      (B) P  
(C) O                      (D) Q

Among the given options, one option is different in one way or the other. Select that odd one out.

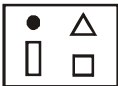

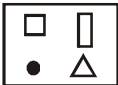
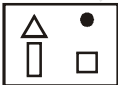
- (A) MOTHER              (B) BROTHER  
(C) SISTER                (D) FRIEND

3. What is the product of all the numbers in the dial of a telephone?

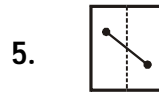
- (A) 1,58,480              (B) 1,59450  
(C) 1,59,480              (D) 0





Each of the following questions consists of three figures. Select the correct figure from the options that would continue the series established by the remaining figures.

4. 

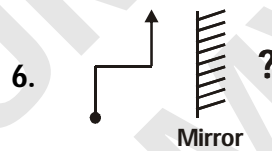
- (A)       (B)   
(C)       (D) 


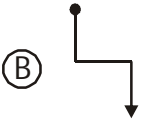

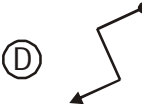
In each of the questions, a sheet having certain design on either sides of a dotted line is given. Select the option that is obtained by folding the sheet along the dotted line.



- (A)       (B)   
(C)       (D) 

Choose the correct mirror image for the given figures and words if mirror is placed vertically right to the figure.



- (A)       (B)   
(C)       (D) 

### Key

1	2	3	4	5	6	7	8	9	10
C	D	D	A	B	A				