



# Reasoning

1. The following question is based on the following alphabet series.

ABCDEFGHIJKLMNOPQRSTUVWXYZ

Which letter is exactly midway between H and S in the given alphabet?

- (A) L                      (B) M  
(C) N                      (D) No such letter

In each of the following questions, various terms of an alphabet series are given with one or more terms missing as shown by (?) or (—). Choose the missing terms out of the given options.

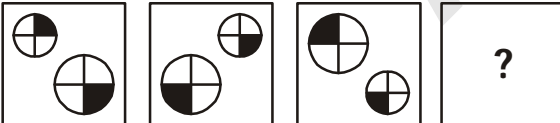
2. —a—b—abaa—bab—abb


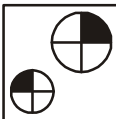
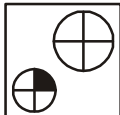
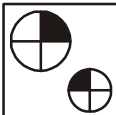
- (A) aaabb                (B) ababb  
(C) babab                (D) babba

3. A can type 10 pages in 5 minutes. B can type 5 pages in 10 minutes. Working together, how many pages can they type in 30 minutes?


- (A) 15 pages            (B) 25 pages  
(C) 65 pages            (D) 75 pages


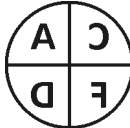


Each of the following questions consists of some figures. Select the correct figure from the options that would continue the series established by the given figures.

4. 

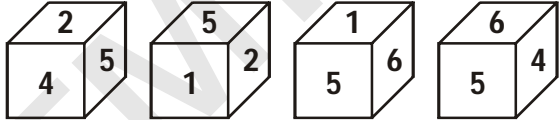
- (A)             (B)   
(C)             (D) 

Choose the correct mirror image for the given figures and words if mirror is placed vertically right to the figure.

5. 

- (A)             (B)   
(C)             (D) 

6. Which number is opposite to number 1?

- 
- (A) 4                      (B) 6  
(C) 2                      (D) 5

Key

1	2	3	4	5	6	7	8	9	10
D	D	D	B	C	A				