

Powered by:



Student's Reference Sample Paper



Syllabus

- ✓ Competence and knowledge in Reasoning (Verbal & Non-verbal) & English (Grammar & Vocabulary)

Exam pattern

| Class | No. of Questions | Total Marks | Duration (min.) |
|-----------|------------------|-------------|-----------------|
| Class - 7 | 75 | 75 | 90 |

For Class 7

| | |
|-----------|------|
| English | : 35 |
| Reasoning | : 45 |

English

Each of the following questions contains a main word. Select the word from the options that is most similar in meaning to the given word

1. Crippled

- (A) Able (B) Sympathy
(C) Sorrow (D) Disabled

Identify the correct sentence structure (Sub + verb + object)

2. (A) Home she drives after work
(B) She home drives after work
(C) She drives home after work
(D) After work she drives home

Add a suitable Question tag for the given sentences.

3. You wouldn't report me, _____
(A) Don't you (B) Would you
(C) Wouldn't you (D) Do you

4. In the given text there are two spelling errors with respect to the context. Identify and choose the correct option.

Line 1. *There was a greedy young man named Gingile.*
Line 2. *He rarely shared anything with anyone.*
Line 3. *He preferred to keep everything to himself weather it was a meat of an animal he had killed or the corn he grew in his small garden*

- (A) Line 2 and Line 3 (B) Line 2 and line 3
(C) Only line 3 (D) Only Line 1

Complete the conversation choosing the appropriate word from the given options.

You: Hai, I am sorry.

Friend: Hai. But I waited for you for a _____ (33) _____

5. (A) Quiet long time (B) Quite long time
(C) Quiet short while (D) Quite short while

Key

| | | | | | | | | | |
|---|---|---|---|---|---|---|---|---|----|
| 1 | 2 | 3 | 4 | 5 | 6 | 7 | 8 | 9 | 10 |
| D | C | B | C | B | | | | | |

Reasoning

1. How many pairs of letters are there in the word 'HORIZON' which have as many letters between them in the word as in the English Alphabet?

- (A) 0 (B) 1
(C) 2 (D) more than 3

There is a certain relationship between the pairs of words given on either side of ::. Identify the relationship of the given pair and find the missing term.

2. EYE : MYOPIA :: TEETH : ?



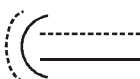

- (A) PYORRHOEA (B) CATARACT
(C) TRACHOMA (D) ECZEMA

Mathematical Reasoning

3. If '×' stands for 'addition', '÷' stands for 'subtraction', '+' stands for 'multiplication', and '-' stands for 'division', then $20 \times 8 \div 8 - 4 + 2 = ?$





- (A) 80 (B) 25
(C) 24 (D) 5

Among the given options, one option is different in one way or the other. Select that odd one out.

4. (A)  (B) 
(C)  (D) 

There is a certain relationship between the pairs of figures given on either side of ::. Identify the relationship of the given pair and find the missing figure.

5.  :  ::  : ?

- (A)  (B) 
(C)  (D) 

In each of the following questions particular words are assigned certain substituted names/codes. Answer in the substituted code language.

6. In a certain code PAPER is written as \$3\$%☆ and STAR is written as # 4 3☆, then what is PASTE in that code?

- (A) \$4 3 # % (B) \$ 3 # 4 %
(C) \$ 3 # ☆ % (D) 3 \$ 4 # %

Key

| | | | | | | | | | |
|---|---|---|---|---|---|---|---|---|----|
| 1 | 2 | 3 | 4 | 5 | 6 | 7 | 8 | 9 | 10 |
| D | A | C | D | C | B | | | | |