

Powered by:



Student's Reference Sample Paper



State Level Reasoning & English Olympiad

Syllabus

- ✓ Competence and knowledge in Reasoning (Verbal & Non-verbal) & English (Grammar & Vocabulary)

Exam pattern

Class	No. of Questions	Total Marks	Duration (min.)
Class - 5	50	50	90

For Class 5

English	:	25
Reasoning	:	25

English

Choose the most suitable alternative in accordance with the correct use of tense:

- (A) It is looking that may rain
(B) It looks that it may rain
(C) It is looked that it may rain
(D) It may rain that it looked

2. Give the opposite in meaning for the word given

FICTION

- (A) fact (B) imaginary
(C) fantasy (D) fanatic

3. Add Question tag for the following.

He looks handsome, _____?

- (A) isn't he
(B) wasn't he
(C) didn't he
(D) doesn't he

4. Unscramble the following sentence

See Mom know how a movie to did I went?

- (A) I went to see mom know a movie did how?
(B) How did a movie went to see mom I know?
(C) How did mom know I went to see a movie?
(D) I went to see a movie how did mom know?

Give the passive form for the following

5. Get me the banana

- (A) A banana get me
(B) You are requested to get me a banana
(C) Let a banana be give to me
(D) You are told to get a banana.

Key

1	2	3	4	5	6	7	8	9	10
C	A	A	C	B					

Reasoning

In the following question particular words are assigned certain substituted names/ codes. Answer in the substituted code language.

1. If 'WHITE' is called 'BLUE', 'BLUE' is called 'RED', 'RED' is called 'YELLOW', 'YELLOW' is called 'GREEN', 'GREEN' is called 'BLACK', 'BLACK' is called 'VIOLET' and 'VIOLET' is called 'ORANGE', what would be the colour of human blood?

- (A) RED (B) GREEN
(C) YELLOW (D) VIOLET

Among the given options, one option is different in one way or the other. Select that odd one out.





2. (A) BISCUIT (B) CHOCOLATE
(C) CAKE (D) BREAD

Direction sense

3. At the time of sunrise, if a man stands facing the East, his shadow will be towards

- (A) WEST (B) EAST
(C) NORTH (D) SOUTH

Among the given options, one option is different in one way or the other. Select that odd one out.

4. (A)  (B) 
(C)  (D) 

Each of the following questions consists of three figures. Select the correct figure from the options that would continue the series established by the other figures.

5.

	△
□	○

□	
○	△

○	□
△	

?

- (A)

	△
□	○

 (B)

△	○
	□
- (C)

○	□
	△

 (D)

	△
○	□

Key

1	2	3	4	5	6	7	8	9	10
C	B	A	D	B					