

Powered by:



# Student's Reference Sample Paper



## Syllabus

- ✓ Competence and knowledge in Reasoning (Verbal & Non-verbal) & English (Grammar & Vocabulary)

## Exam pattern

Class	No. of Questions	Total Marks	Duration (min.)
Class - 2	40	40	90

### For Class 2

English	: 20
Reasoning	: 20

## English

Arrange the words given in a correct order to form meaningful sentences.

1. Has he my pen

- (A) My pen he has      (B) He has my pen  
(C) Has he pen my      (D) My pen has he

Complete the story by filling the blanks with appropriate word from the options.

An old man had four sons who 15 among themselves. He called them one day and gave a 16 of sticks. He asked all of them to break the bundle. None of them could. Then he gave them a single stick each and asked them to break. They could do it 17. He then advised his 18 to be together as "Unity is 19".

2. (A) fought                      (B) discussed  
(C) fighter                      (D) enjoyed

3. (A) group                      (B) bundle  
(C) some                      (D) pile

4. (A) difficult                      (B) easily  
(C) hardly                      (D) timely

5. (A) students                      (B) workers  
(C) daughters                      (D) sons

6. (A) strength                      (B) fall  
(C) divided                      (D) life

### Key

1	2	3	4	5	6	7	8	9	10
B	A	B	B	D	A				

### Class 2 & 3

**SECTION - 1 Vocabulary & Grammar:** Synonyms, Antonyms, Jumbled Words, Nouns And Pronouns, Verbs Contractions, Error Identification

**SECTION - 2 Reading Comprehension:** Specific Information Stories.

**SECTION - 3 Creative Expression :** Telephonic Conversations, Functional Grammar

# Reasoning

Among the given options, one option is different in one way or the other. Select that odd one out.

1. (A) JANUARY                      (B) AUGUST  
(C) NOVEMBER                    (D) OCTOBER






In each of the following questions, various terms of an alphabet series are given with one or more terms missing as shown by (?). Choose the missing terms out of the given options.

2. A, C, E, G, I, K, M, ?  
(A) O                                      (B) P  
(C) Q                                      (D) R

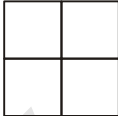
There is a certain relationship between the pairs of words given on either side of :: . Identify the relationship of the given pair and find the missing term.

3. MOON : SATELLITE :: EARTH : ?  
(A) SUN                                    (B) PLANET  
(C) SOLAR SYSTEM                    (D) ASTEROID

Find the figure from the options in which the question figure is exactly hidden / embedded.

4. 
- (A)                       (B)   
(C)                       (D) 

5. Count the number of squares in the given figure.

- 
- (A) 4                                      (B) 5  
(C) 2                                      (D) 6

Key

1	2	3	4	5	6	7	8	9	10
C	A	B	D	B					